

A system that executes a power cycle while receiving 600





Overview

How does a power cycle work?

A system undergoes a power cycle while receiving 1000 kJ by heat transfer from a thermal reservoir at a temperature of 500 K and discharging 600 kJ by heat transfer to a thermal reservoir at (a) 200 K, (b) 300 K, (c) 400 K. For each case, determine whether the cycle operates irreversibly, operates reversibly, or is impossible.

How does a reversible power cycle work?

A reversible power cycle whose thermal efficiency is 40 % receives 50 kJ by heat transfer from a hot reservoir at 600 K. To determine the energy rejected and the temperature of the cold reservoir, the information provided is sufficient.

How is q_c discharged in a reversible power cycle?

Q_c is discharged by heat transfer to the cold reservoir. The thermal efficiency of an irreversible power cycle is always less than the thermal efficiency of a reversible power cycle when each operates between the same two thermal reservoirs.

How much power does a power cycle produce?

A power cycle operates between hot and cold reservoirs at 500 K and 310 K, respectively. At steady state, the cycle produces a power output of 0.1 MW. Determine the minimum theoretical rate at which energy is rejected by heat transfer to the cold reservoir.

How many kJ are in a power cycle?

The data listed below are claimed for power cycles operating between hot and cold reservoirs at 1000 K and 400 K, respectively. For one case, the heat input (Q_H) is 140 kJ and the heat output (Q_C) is also 140 kJ. For each case determine whether such a cycle is in keeping with the first and second laws of



thermodynamics. $Q_C = 120$ kJ. $Q_C = 140$ kJ. $Q_C = 100$ kJ.

How many reversible cycles operate between hot and cold reservoirs?

Two reversible cycles operate between the hot and cold reservoirs. One of them is a power cycle, and the other is a heat pump cycle. (a) What is the relation between the coefficient of performance of the heat pump cycle and the thermal efficiency of the power cycle?



A system that executes a power cycle while receiving 600



Answered: A system executes a power cycle while... , bartleby

A system executes a power cycle while receiving 1000 Btu by heat transfer at a temperature of 900 R and discharging 600 Btu by heat transfer at a temperature of 540 R. There are no other heat transfers. Determine the cycle thermal efficiency. Use the Clausius

Second Law of Thermodynamics Alternative Statements

A system undergoes a power cycle while receiving 1000 kJ by heat transfer from a thermal reservoir at a temperature of 500 K and discharging 600 kJ by heat transfer to a thermal ...



Answered: A SYStem executes a power cycle while... , bartleby

Solution for A SYStem executes a power cycle while receiving 750 k) by heat transfer at a temperature of 1500 k and discharging 100 kJ by heat trans fer at... Q16) The following data are for a simple steam power plant as shown. State 2 3 4 7 P MPa 6.2 6.1 5.9 5.7 5.5 0



Problem 26 An inventor claims to have devel [FREE ...

A power cycle is a process where a working fluid (like steam or gas) goes through a series of state changes, transforming heat energy into mechanical work. This cycle is repeated over and ...



Answered: A system executes a power cycle while... , bartleby

A system executes a power cycle while receiving 1000 Btu by heat transfer at a temperature of 900oR and discharging 600 Btu by heat transfer at a temperature of 540oR. There are no other heat transfers termine the cycle thermal efficiency.



Solved 5.63 As shown in Fig. P5.63, a system executes a

5.63 As shown in Fig. P5.63, a system executes a power cycle while receiving 750 kJ by heat transfer at a temperature of 1500 K and discharging 100 kJ by heat transfer at a temperature of 500 K. Another heat transfer from the system occurs at a temperature of 1000 K.



Solved As shown in the figure below, a system ...

As shown in the figure below, a system executes a power cycle while receiving $Q_1 = 600$ kJ by heat transfer at a temperature of 1500 K and discharging 100 kJ by heat transfer at a temperature of 500 K. Another heat transfer from the system ...





Solved A system executes a power cycle while receiving 900

A system executes a power cycle while receiving 900 Btu by heat transfer at a temperature of 900 o R and discharging 600 Btu by heat transfer at a temperature of 540 o R. There are no other heat transfers. Determine the cycle thermal efficiency. Use the Clausius



Solved A system executes a power cycle while receiving 900

A system executes a power cycle while receiving 900 kj by heat transfer at a temperature of 500 K and discharging 500 kj by heat transfer at a temperature of 300 K. There are no other heat transfers. Determine the cycle efficiency. Use the Clausius Inequality to



Shown in the figure below is a system that executes a , Chegg

Question: Shown in the figure below is a system that executes a power cycle while receiving 1-600 Btu by heat transfer at a temperature of $T_1=1250$ R and discharging of $T_2 = 800$ R. A third heat transfer occurs at a temperature of $T_3 = 600$ R.



TAX FREE

ENERGY STORAGE SYSTEM

Product Model
HJ-ESS-215A(100KW/215KWH)
HJ-ESS-115A(50KW 115KWH)

Dimensions
1600*1280*2200mm
1600*1200*2000mm

Rated Battery Capacity
215KWH/115KWH

Battery Cooling Method
Air Cooled/Liquid Cooled

A system executes a power cycle while receiving 1000 Btu by ...

A system executes a power cycle while receiving 1000 Btu by heat transfer at a temperature of 900 {eq}^o{/eq}R and discharging 800 Btu by heat transfer at a temperature of 540 {eq}^o{/eq}R. There are no other heat transfers. Determine the cycle thermal efficiency.



Solved Shown in the figure below is a system that executes a

Shown in the figure below is a system that executes a power cycle while receiving $Q_1 = 1800 \text{ Btu}$ by heat transfer at a temperature of $T_1 = 1250 \text{ R}$ and discharging $Q_2 = 1200 \text{ Btu}$ by heat transfer at a temperature of $T_2 = 800 \text{ R}$. A third heat transfer occurs at a



Solved Shown in the figure below is a system that ...

Shown in the figure below is a system that executes a power cycle while receiving $Q_1 = 1800 \text{ Btu}$ by heat transfer at a temperature of $T_1 = 1500 \text{ R}$ and discharging $Q_2 = 1200 \text{ Btu}$ by heat transfer at a temperature of $T_2 = 800 \text{ R}$. A third heat ...

Shown in Fig. P5.94 is a system that executes a power cycle ...

(a) Applying an energy balance together with Eq. 5.13, determine the direction and allowed range of values, in Btu, for the heat transfer at 600 R . (b) For the power ...



Answered: A system executes a power cycle while... , bartleby

A system executes a power cycle while receiving 900 Btu by heat transfer at a temperature of 900 R and discharging 800 Btu by heat transfer at a temperature of 540 R . There are no other heat transfers. Determine the cycle thermal efficiency. Use the Clausius



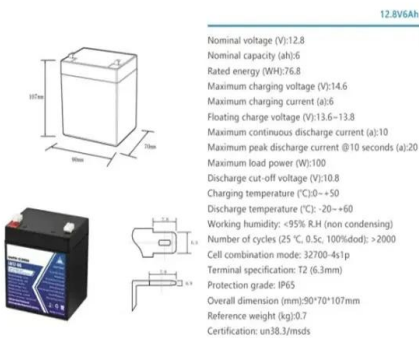
A system executes a power cycle while receiving 2000 Btu by

At steady state, a refrigeration cycle operating between hot and cold reservoirs at 300 K and 275 K, respectively, removes energy by heat transfer from the cold reservoir at a rate of 600 kW. a. If the cycle's coefficient of performance is 4, determine the power input




Answered: A system executes a power cycle while... , bartleby

A system executes a power cycle while receiving 1000 Btu by heat transfer at a temperature of 900oR and discharging 600 Btu by heat transfer at a temperature of 540oR. There are no other heat transfers. Determine the cycle thermal efficiency. Use the Clausius



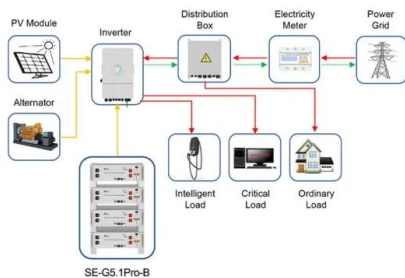
A system executes a power cycle while receiving $Q_1 = 800$ Btu by

A system executes a power cycle while receiving $Q_1 = 800$ Btu by heat transfer at a temperature of 1000 R and discharging $Q_2 = 500$ Btu by heat transfer at a temperature of 800 R. A third heat transfer Q_3 occurs at a temperature of 500 R. These are the only a.



Solved The thermal efficiency of a system that undergoes a , Chegg...

The thermal efficiency of a system that undergoes a power cycle while receiving 1000 kJ of energy by heat transfer from a hot reservoir at 1000 K and discharging 500 kJ of energy by heat transfer to a cold reservoir at 400 K is ____ . Not the question you're



Application scenarios of energy storage battery products



Problem 84 A system executes a power cycle [FREE ...

Short Answer. Expert verified. All investigated efficiency cases (100%, 40%, 25%) render the system impossible due to negative entropy generation values. Step by step solution. 01. Understand the Problem. Given a power cycle with heat transfer. Heat is received at 500 K and ...



Solved A system executes a power cycle while receiving 1000

A system executes a power cycle while receiving 1000 kJ by heat transfer at a temperature of 500 K and discharging 800 kJ by heat transfer at a temperature of 300 K. There are no other heat transfers. Determine the cycle efficiency. Use the Clausius Inequality to



SecondLaw 04

SecondLaw_04 Page 1 of 2 A system executes a power cycle while receiving 1050 kJ by heat transfer at a temperature of 525 K and discharging 700 kJ by heat transfer at 350 K. There are no other heat transfers. a. Determine if the cycle is internally reversible



Problem 84 A system executes a power cycle [FREE ...

A power cycle is a process or series of processes by which a system, often a heat engine, converts heat into work and then returns to its initial state. The common types of power cycles include Rankine, Brayton, and Otto cycles. In these cycles, heat is supplied





Chapter 5, The Second Law of Thermodynamics Video Solutions ...

Shown in Fig. P5.2 is a proposed system that undergoes a cycle while operating between cold and hot reservoirs. The system receives 500 kJ from the cold reservoir and discharges 400 kJ ...



Solved A system executes a power cycle while receiving 1000

Question: A system executes a power cycle while receiving 1000 kJ by heat transfer at a temperature of 500 K and discharging energy by heat transfer at a temperature of 300 K. There are no other heat transfers. Applying Eq. 6.2, determine cycle if the thermal

Solved A system executes a power cycle while receiving 1000

A system executes a power cycle while receiving 1000 kJ by heat transfer at a temperature of 500 K and discharging 700 kJ by heat transfer at a temperature of 300 K. There are no other heat transfers. Determine the cycle efficiency. Use the Clausius inequality



Solved A system executes a power cycle while receiving 900

A system executes a power cycle while receiving 900 kJ by heat transfer at a temperature of 500 K and discharging 800 kJ by heat transfer at a temperature of 300 K. There are no other heat transfers. Determine the cycle efficiency. Use the Clausius Inequality to



Solved 5.94 Shown in Fig. P5.94 is a system that executes a

Question: 5.94 Shown in Fig. P5.94 is a system that executes a power cycle while receiving 600 Btu by heat transfer at a temperature of 1000 degree R and discharging 400 Btu by heat transfer at a temperature of 800 degree R. A third heat transfer occurs at a



Problem 1 A system executes a power cycle [FREE ...

A system executes a power cycle while receiving $(1000 \text{ mathrm}{\sim kJ})$ by heat transfer at a temperature of $(500 \text{ mathrm}{\sim K})$ and discharging energy by heat transfer at a temperature of $(300 \text{ mathrm}{\sim K})$. There are no other heat transfers. Applying Eq. 6.2

Contact Us

For catalog requests, pricing, or partnerships, please visit:
<https://www.vdbconstruction.co.za>